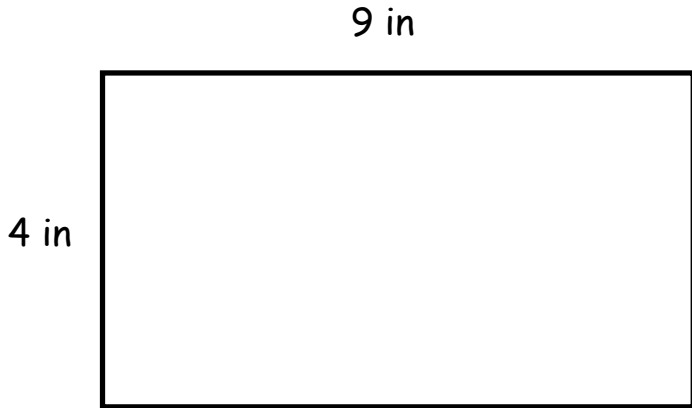




Name: _____

Area and Perimeter

 Directions: Find the area and perimeter with correct units. Show your work.

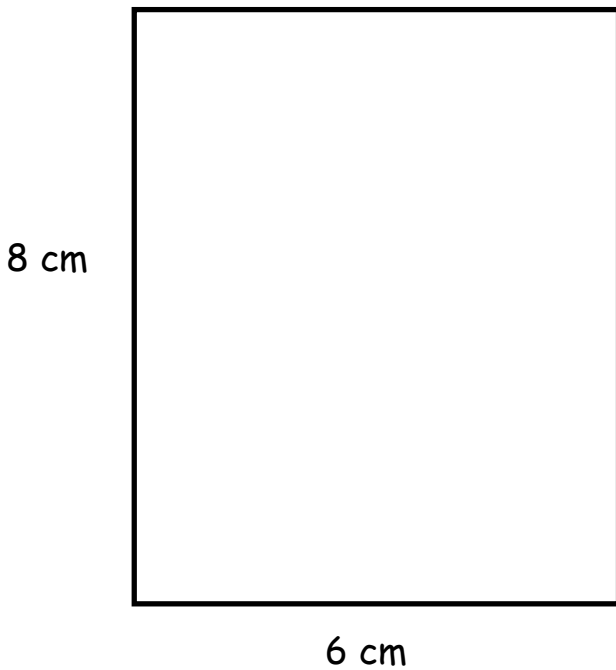


WORKSPACE

Write the equations:

area = _____

perimeter = _____



WORKSPACE


Write the equations:

area = _____

perimeter = _____



Extension: Trace the perimeter of the rectangles with a pen, marker, or crayon. Shade in the area with a highlighter or crayon.





Name: _____

Area and Perimeter

 Directions: Find the area and perimeter with correct units. Show your work.

6 ft

4 ft



WORKSPACE


Write the equations

area = _____

perimeter = _____

7 km

4 km



WORKSPACE

Write the equations:

area = _____

perimeter = _____



Extension: Trace the perimeter of the rectangles with a pen, marker, or crayon. Shade in the area with a highlighter or crayon.

