


Name: _____

Domino Area and Perimeter

Lay some dominoes face down. Pick up one. Draw the dots on the blank domino. Use the numbers as side lengths for a rectangle. Label the sides and find the area and perimeter.



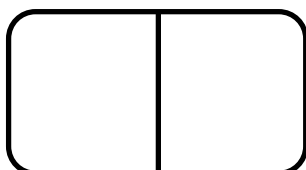


3

$$A = 6 \times 3 = 18 \text{ square units}$$

$$P = 2 \times (6 + 3) = 18 \text{ units}$$

6





Name: _____

Domino Area and Perimeter

Lay some dominoes face down. Pick up one. Draw the dots on the blank domino. Use the numbers as side lengths for a rectangle. Label the sides and find the area and perimeter.

