


 Name: _____

CHRISTMAS WORD PROBLEMS

1. Caden is making ornaments to give as gifts for 16 people. He is making 4 ornaments for each person. How many ornaments does Caden need to make? Solve with the distributive (break apart) strategy. **SHOW YOUR WORK!!**

workspace


ANSWER STATEMENT _____



2. Santa bought apples for his reindeer. He bought 6 apples for each of the nine reindeer. Rudolph ate 14 apples. How many apples are left? Write an equation and solve. **SHOW YOUR WORK!!!!**

workspace

ANSWER STATEMENT _____



 Name: _____

CHRISTMAS WORD PROBLEMS

3. Abby's tree weighed 27 kg. Bella's tree weighed 25,047 grams. Which tree is heavier? How much heavier is it? SHOW YOUR WORK!

workspace

ANSWER STATEMENT _____



4. A reindeer weighs around 200 kg. How much do Santa's reindeer weigh altogether? SHOW YOUR WORK!

workspace

ANSWER STATEMENT _____



 Name: _____

CHRISTMAS WORD PROBLEMS

5. Jada put out cookies and milk for Santa at 7:12. She fell asleep at 7:49. How many minutes went by from when she put the cookies out to when she fell asleep? Label and solve on the number line and then use the tally mark method to check your answer.



workspace

ANSWER STATEMENT



6. It takes 7 gingerbread cookies, 1 cup of icing, 6 jelly beans, 2 suckers, and 5 pieces of licorice to make a gingerbread house. How many of each would you need to make 4 houses? Complete the table below. **SHOW YOUR WORK!**

workspace

cookies	cups of icing	jelly beans	suckers	licorice pieces




 Name: _____

CHRISTMAS WORD PROBLEMS

7. Donner weighs 212 kg. Rudolph weighs 46 kg less than Donner. Dasher weighs 12 kg more than Rudolph complete the table below with the weight of the reindeer

workspace

Donner	Rudolph	Dasher	total of all 3 combined



8. Lilly, Rayleigh, Chase, Blaze, Lyla, and Leland made snowmen. Round the weight of each snowman to the nearest 10. Use the rounded weight to find the total weight of the snowmen together.

workspace

Lilly's snowman	133kg	
Rayleigh's snowman	137kg	
Chase's snowman	112kg	
Blaze's snowman	125kg	
Lyla's snowman	110g	
Leland's snowman	97kg	

ANSWER STATEMENT _____

