

Name: _____

Week 5 Day 1

Complete the number sentence.

$___ + 2 = 10$

$7 + ___ = 10$

$4 + ___ = 10$

$___ + 5 = 10$

Write the number in standard form.

$60 + 4$

Write the value of the underlined digit.

248 _____

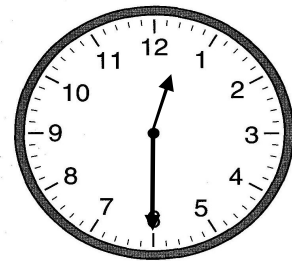
345 _____

685 _____

Circle the greatest number

584 495 349

Write the time.



_____ : _____

Week 5 Day 2

Subtract

$10 - 6 = \underline{\quad}$

$10 - 4 = \underline{\quad}$

$10 - 7 = \underline{\quad}$

$10 - 3 = \underline{\quad}$

$10 - 8 = \underline{\quad}$

$10 - 2 = \underline{\quad}$

Skip count by 10 starting with 25.

25, _____, _____, _____, _____, _____

How many hundreds, tens and ones?

$700 + 40 + 3$

_____ hundreds


_____ tens

_____ ones

Write the number in standard form.

$400 + 30 + 8$

Write the time.



_____ : _____

Name: _____

Week 5 Day 3

Complete the number sentence.

$___ + 4 = 8$

$8 + ___ = 16$

$3 + ___ = 6$

$___ + 6 = 12$

How much money?



Write the value of the underlined digit.

586 _____

429 _____

485 _____

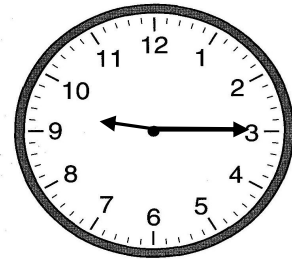
Circle the group of numbers that are from least to greatest.

a) 56, 67, 34, 59

b) 68, 45, 68, 25

c) 45, 68, 87, 90

Write the time.



Subtract

$17 - 8 = \underline{\quad}$

$7 - 3 = \underline{\quad}$

$9 - 4 = \underline{\quad}$

$11 - 5 = \underline{\quad}$

$18 - 9 = \underline{\quad}$

$15 - 7 = \underline{\quad}$

Week 5 Day 4

Skip count by 5 starting with 10.

10, _____, _____, _____, _____, _____

How many hundreds, tens and ones?

345

_____ hundreds


_____ tens

_____ ones

Write the number in standard form.

$800 + 50 + 7$

Write the time.



Name: _____

Week 5 Day 5

Complete the number sentence.

$___ + 9 = 18$

$8 + ___ = 17$

$3 + ___ = 10$

$___ + 7 = 15$

Write the numbers in order from least to greatest.

56, 32, 89, 23

____, _____, _____, _____

Write the value of the underlined digit.

658 _____

658 _____

658 _____

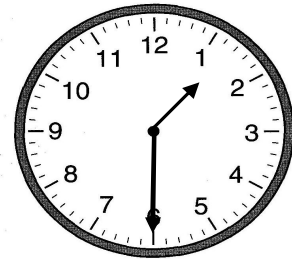
Circle the group of numbers that are from least to greatest.

a) 34, 46, 68, 90

b) 56, 34, 78, 89

c) 34, 56, 73, 15

Write the time.



_____ : _____

Week 5 WP

Donnie has a fieldtrip on the date highlighted on the calendar.

Write the full date and the date using digits on the lines below.

September 2014

S M T W T F S

	1	2	3	4	5	6
7	8	9	10	11	12	13
14	15	16	17	18	19	20
21	22	23	24	25	26	27
28	29	30				