

Name: \_\_\_\_\_

Week 9 Day 1

Complete the number sentence.

$$\begin{array}{r} 48 \\ +22 \\ \hline \end{array}$$

$$\begin{array}{r} 67 \\ + 8 \\ \hline \end{array}$$

Is 13 even or odd?



\_\_\_\_\_

What is 10 less than?

78 \_\_\_\_\_

32 \_\_\_\_\_


46 \_\_\_\_\_

Use the commutative property to complete the number sentence.

$$4 + 5 = \_ + 4$$

$$2 + 6 = 6 + \_$$

Write the time.



\_\_\_\_\_ : \_\_\_\_\_

Add

$$7 + 5 + 3 + 4 = \underline{\hspace{2cm}}$$

$$2 + 8 + 2 + 2 = \underline{\hspace{2cm}}$$

Week 9 Day 2

Skip count by 10 starting with 224.

224, \_\_\_\_\_, \_\_\_\_\_, \_\_\_\_\_, \_\_\_\_\_

Circle the greatest number.


- a)  $500 + 70 + 5$
- b)  $900 + 9$
- c)  $300 + 20 + 6$
- d)  $90 + 5$

Write the number in standard form.

$$700 + 50 + 6$$

\_\_\_\_\_

Write the time.



\_\_\_\_\_ : \_\_\_\_\_

Name: \_\_\_\_\_

## Week 9 Day 3

Complete the number sentence.

$___ + 6 = 15$

$9 + ___ = 12$

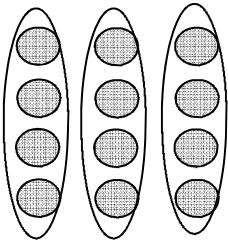
$14 - ___ = 6$

$___ - 7 = 7$

How much money?



use repeated addition to show how many circles there are.



$___ + ___ + ___ = ___$

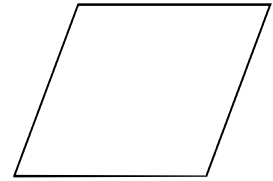
Circle the group of numbers that are from least to greatest.

a) 569, 384, 609, 568

b) 384, 568, 569, 609

c) 284, 568, 609, 569

How many sides and vertices?



\_\_\_\_\_ sides \_\_\_\_\_ vertices

Complete the number sentence.

$___ + 6 = 12$

$8 + ___ = 14$

$14 - ___ = 8$

$___ - 6 = 8$

## Week 9 Day 4

Skip count by 5 starting with 315.

315, \_\_\_\_\_, \_\_\_\_\_, \_\_\_\_\_, \_\_\_\_\_, \_\_\_\_\_

Partition (divide) the shape into 2 equal parts.



Write the number in expanded form.

438

\_\_\_\_\_

Draw a shape with 3 sides.

Name: \_\_\_\_\_

## Week 9 Day 5

Complete the number sentence.

$$\begin{array}{r} 23 \\ 24 \\ + 17 \\ \hline \end{array} \qquad \begin{array}{r} 38 \\ 24 \\ + 24 \\ \hline \end{array}$$

Write the numbers in order from least to greatest.

56, 673, 349, 649

\_\_\_\_\_ , \_\_\_\_\_ , \_\_\_\_\_ , \_\_\_\_\_

Write the value of the underlined digit.

102 \_\_\_\_\_

102 \_\_\_\_\_

102 \_\_\_\_\_

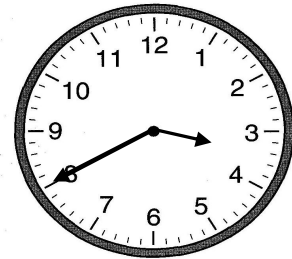
Write the number in word form.

523

\_\_\_\_\_

\_\_\_\_\_

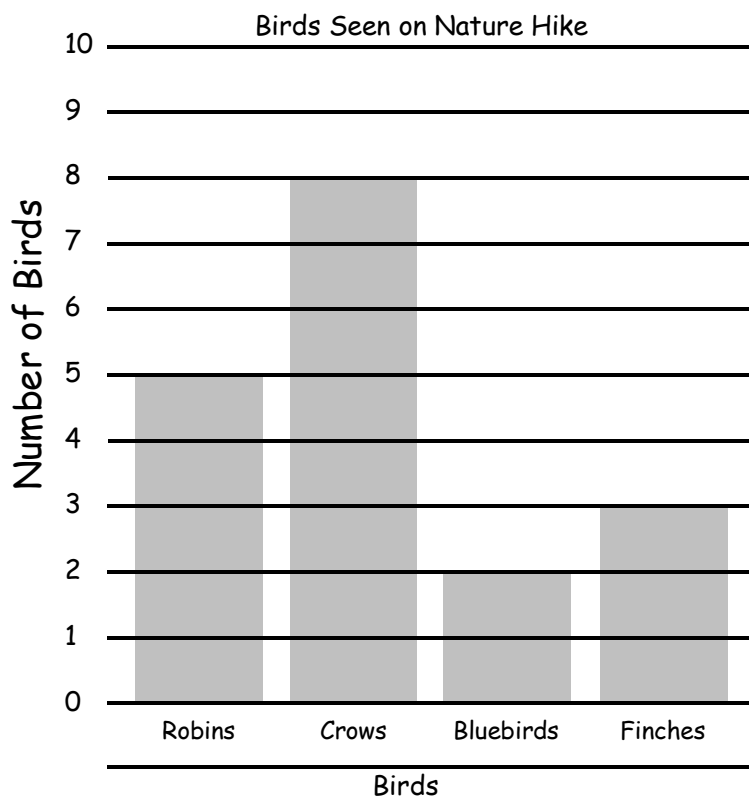
Write the time.



\_\_\_\_\_ : \_\_\_\_\_

Use the graph to answer the questions.

## Week 9 WP



1. Which bird did they see the most?

\_\_\_\_\_

2. How many birds did they see in all?

\_\_\_\_\_

3. How many more crows did they see than bluebirds? (number sentence)

\_\_\_\_\_